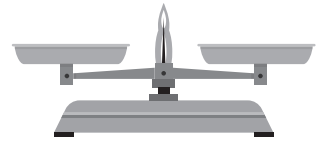
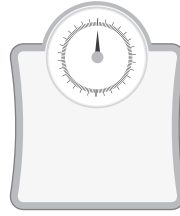



Name: \_\_\_\_\_

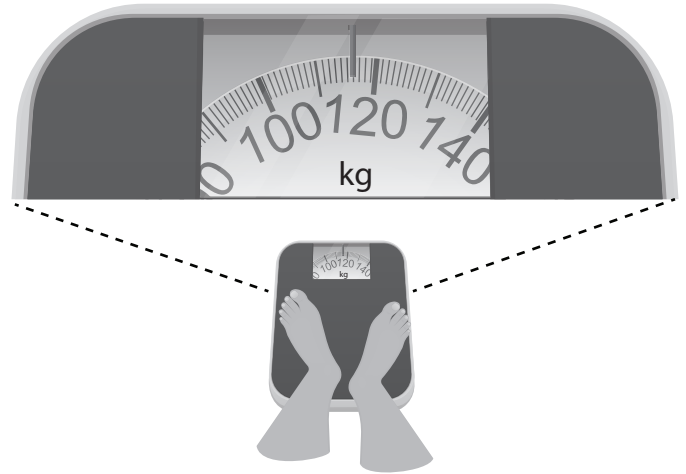
1) Sam needs 250 grams of flour to bake a cake. Which scaled instrument should Sam use?



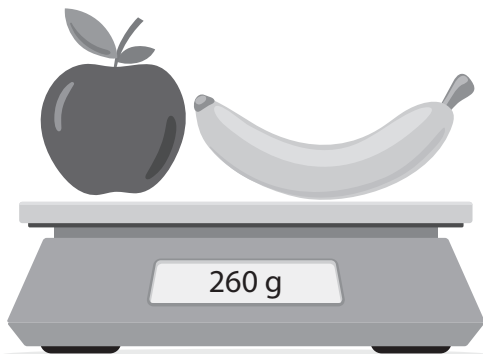
2) Sam stood on bathroom scales while carrying his dog Zac.

a) What is Sam and Zac's combined weight? \_\_\_\_\_

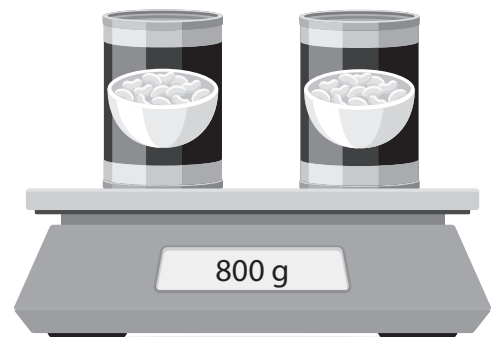
b) If Zac weighs 26 kilograms, how much does Sam weigh? \_\_\_\_\_



4) An apple and banana, then only the banana is weighed. How much does the apple weigh? \_\_\_\_\_

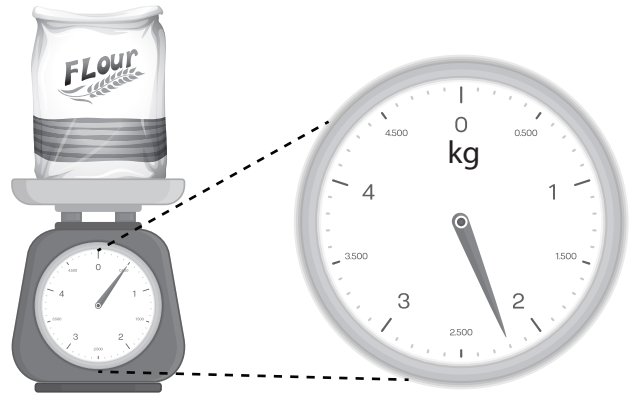
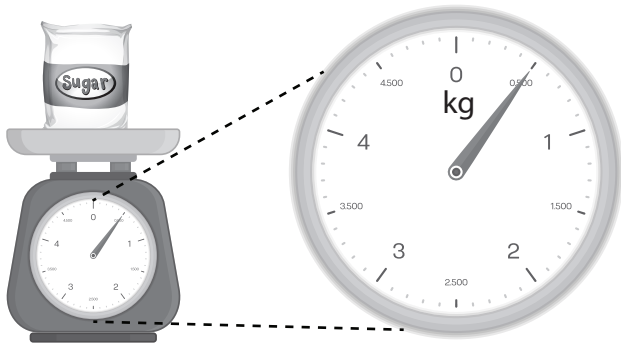


5) Alison weighed two cans of beans. How many cans would weigh two kilograms? \_\_\_\_\_



Name: \_\_\_\_\_

6) The maximum reading on these kitchen scales is five kilograms.



a) What does the bag of sugar weigh?

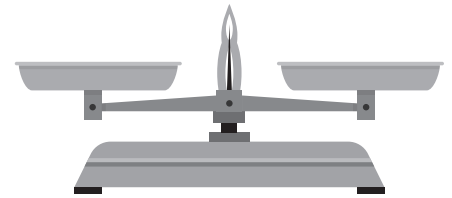
\_\_\_\_\_

b) What does the bag of flour weigh?


\_\_\_\_\_

7) A bag of oranges weighing two and a half kilograms is placed on one side of a balance scale.


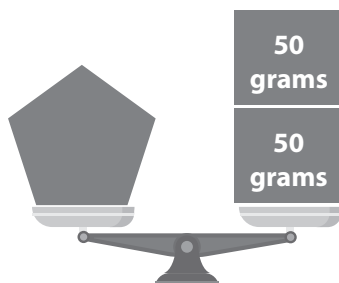
How many 250-gram bags of nuts are needed to balance the scale? \_\_\_\_\_



8) This scale has a maximum reading of three kilograms. What is the current reading on the scale?



9) Each scale is balanced.



What is the weight of each circle? \_\_\_\_\_