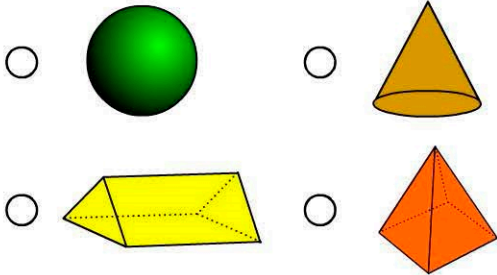


3D Space

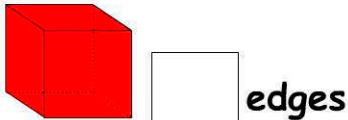
Name:

Date:

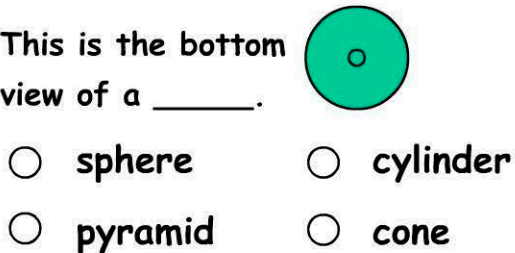
1. Which 3D object is a square pyramid?



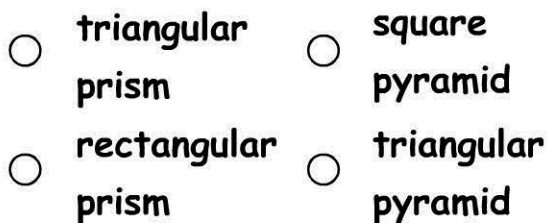
2. How many edges does a cube have?



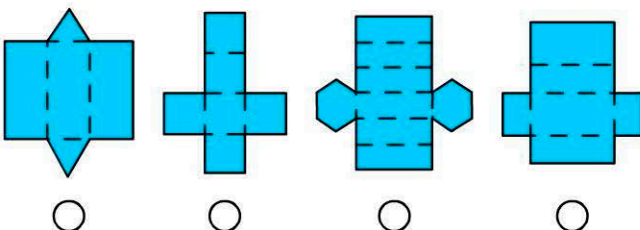
3. This is the bottom view of a _____.




4. **What shape am I?** My net is made of two triangles and three rectangles.



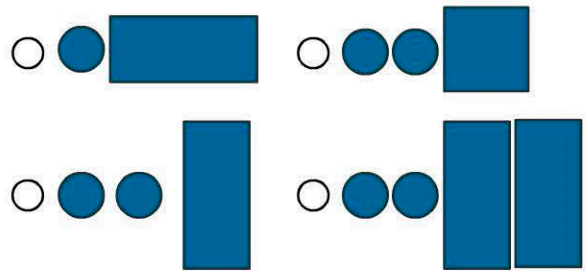
5. Which net can be folded to make a rectangular prism?



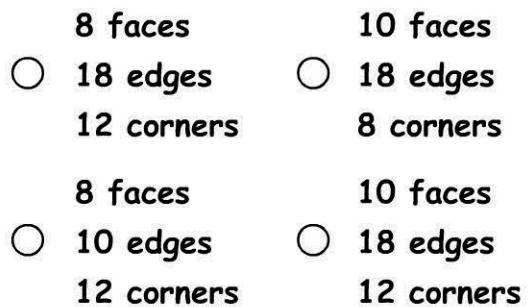
6. What is the name of this 3D object?



7. Which 2D shapes are needed to make a cylinder?



8. Choose the correct set of properties for a hexagonal prism.



9. How many triangles and one square are needed to make a square pyramid?



10. A cone has edge/edges?