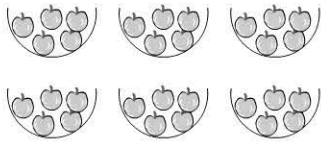



Groups of 5



How many apples altogether? _____



2 groups of 5 = _____

3 groups of 5 = _____

9 groups of 5 = _____

6 groups of 5 = _____

5 groups of 5 = _____

8 groups of 5 = _____

7 groups of 5 = _____

1 group of 5 = _____

4 groups of 5 = _____

10 groups of 5 = _____

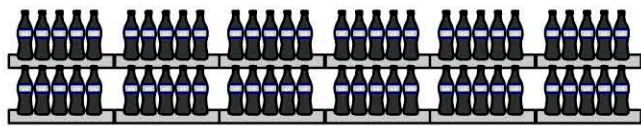
Working Mathematically

1)



There are 5 girls in each team. How many girls in 8 teams? _____

2)




How many bottles are there? _____

3) 11 groups of 5 = _____

4) $5 + 5 + 5 + 5 + 5 + 5 =$ _____

5) There are 5 fish in each tank.
There are 30 fish altogether.



How many tanks are there?

- 2 tanks
- 4 tanks
- 6 tanks
- 8 tanks