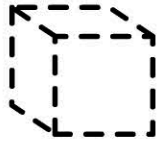






Name:

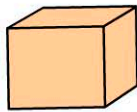
Date:

1. After tracing, which object will be drawn?

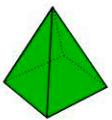





-   
-   



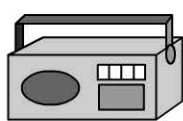

2. How many flat surfaces does this box have?







3. Which object has 8 corners?


-   
-   

4. Which object has no corners?

-   
-   

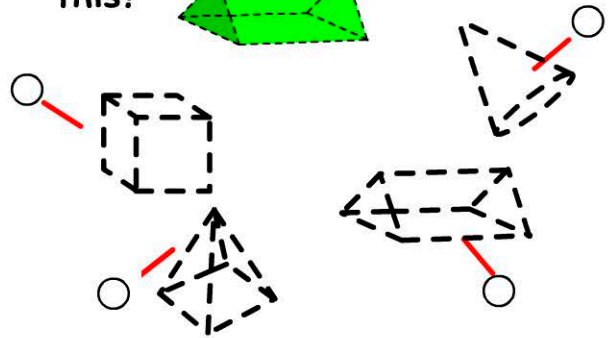
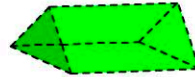
5. Which object has both flat and curved sides?

-   
-   

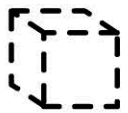


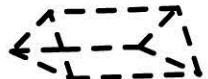
6. How many corners does a ball have? 


- 0  2
- 1  3

7. Which would you trace to draw this?



8. Which is cone shaped?

-   
-   

9. This object has  corners. 

10. This object has  flat surfaces. 