

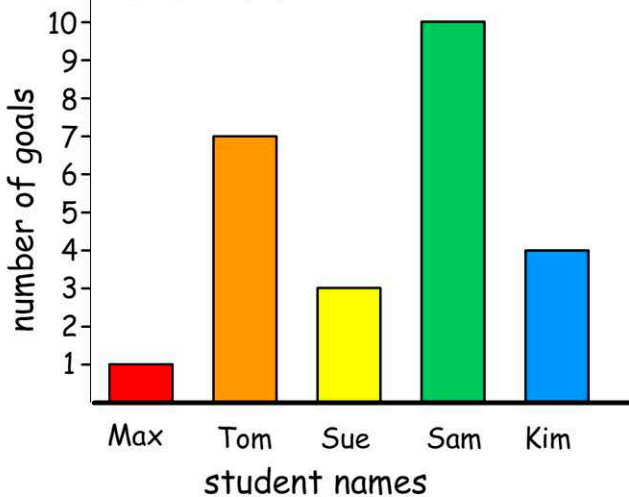
Name:

Weather conditions

Monday	windy
Tuesday	sunny
Wednesday	rainy
Thursday	cloudy
Friday	rainy

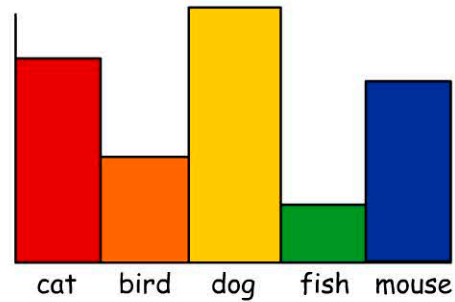
- Which day was sunny?
 Monday Thursday
 Tuesday Friday
- How many days of data is shown?

Goals Scored



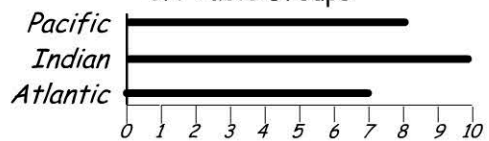
- Who scored the most goals?
Max Tom Sue Sam
- Who scored 4 goals?
Sue Kim Tom Sam
- How many more goals than Max did Tom score?
4 5 6 7

Our Pets



- If sorted from lowest to highest, which pet is in the middle?
 mouse bird
 dog cat
- If 10 children have a pet cat, how many have a pet dog?
 8 10
 9 12
- If 10 children have a pet cat, how many have a pet bird?
 5 9
 8 10

3H Table Groups



How many students in the Atlantic group?

- Teachers that have brown hair.

||||| ||| ||

How many have brown hair?