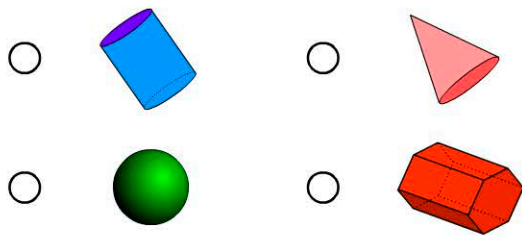


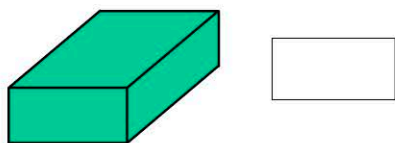
Name:

Date:

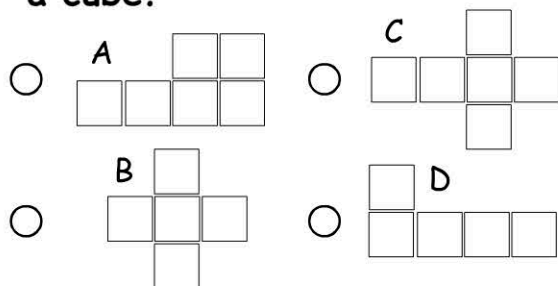
1. Which object is a cylinder?




2. How many rectangles are needed to make this object?



3. Which net is used to make a cube?

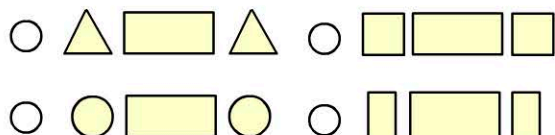


4. Name this object.

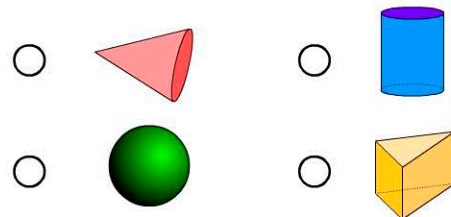


- rectangular prism pyramid
- hexagon cube

5. Which shapes are needed to make a cylinder?



6. Which is the only object without any curved faces?



7. Which object am I? I am made using a square and 4 triangles.

- cube pyramid
- triangular prism cylinder

8. Which object is similar to an orange?



- cylinder hemisphere
- sphere cube

9. How many squares are needed to make a cube?



10. A cylinder is made using a rectangle and circles.