



Fractions

Name:

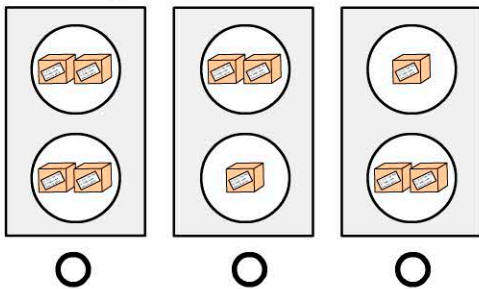
1. Which object is NOT cut in to quarters?




2. After the bread is cut in half how many pieces will there be?



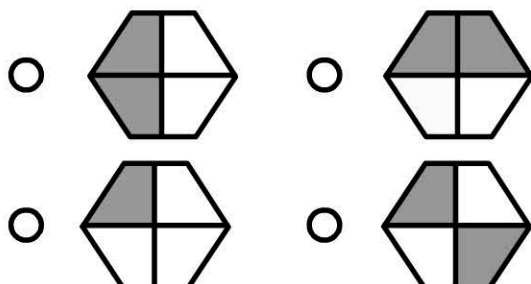
3. Which group is divided in half?



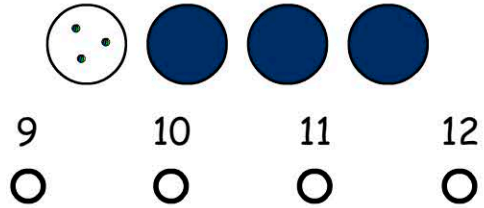
4.  If this group is divided in to quarters, how many in each smaller group?

- 1 3
 2 4

5. Which shape has one quarter shaded?



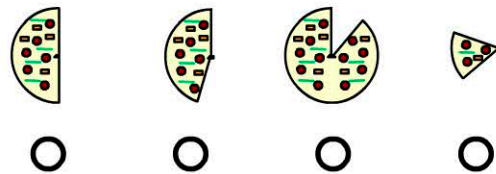
6. The group is divided in to quarters. Three parts are covered. How many dots altogether?



7. Which is greater than a half?



8. Which is equal to a half?



9. 12 eggs are divided into four equal groups. How many in each group?

10. 4 baskets. 3 eggs in each basket. How many eggs altogether?

score